


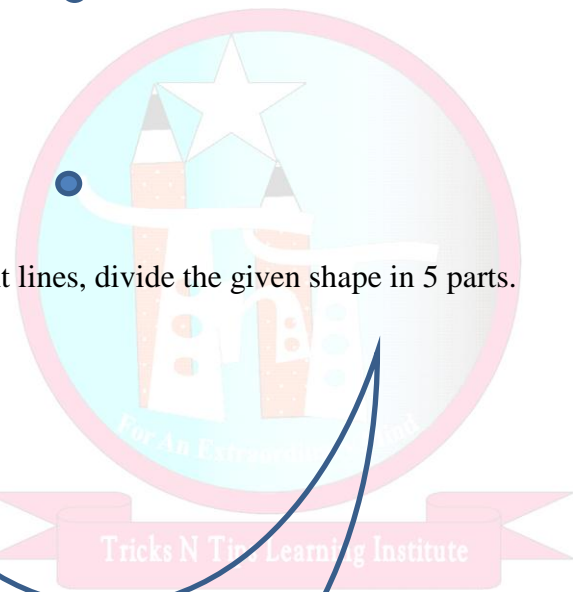

## Brain Gym activity: (Thinking extraordinary... Beyond boundaries)

Task 1: Join given 9 dots by using only 4 straight continuous lines/without lifting your pencil

\*Use pencil only



Task 2: Using 2 straight lines, divide the given shape in 5 parts.



Take a note:

Mental Math Worksheet:

Calculate below sums.


Answers must be written MENTALLY in a horizontal line only.

(TIME ALLOWED MAX= 12 MINUTES FOR ALL BELOW SUMS)

Find complement of	Calculate mentally
1236=	45 X45=
9020=	999X6=
5655=	78 X72=
86=	81X89=
761=	4 X99=
1090=	103 x 107=
3892=	98 X92=
69=	63 X67=
9020=	75 X75=
5655=	202 X 208=
12560=	1007 x1003=
3331=	43 X47 =
580=	69 x61 =
4589=	9999 x 9=

Think Beyond:

Task 3: Join below 16 dots by 6 continuous straight lines.



Ticks N Tips Learning Institute